
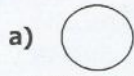


MATHS OLYMPIAD (class -II)

WORKSHEET- 2

1. Which one of the following figures is a curved line.



2. What time does the clock show in the figure below.



a) 10:05

b) 3:00

c) 9:30

d) 8:45

3. Given below are the cost of different items, which item is the most expensive?

Number of item	cost
Ball	₹ 20
Book	₹ 30
Pencil box	₹ 15

a) ball

b) book

c) pencil box

d) none of these

4. Pick up the true statement.

a) 98 minutes is bigger than 100 minutes

b) 48 minutes is bigger than 105 minutes

c) 58 minutes is bigger than 108 minutes

d) 108 minutes is bigger than 58 minutes

5. Which one of the following bag is the heaviest?



Wheat



Rice



Bajra



Rajma

a) Rajma

b) Wheat

c) Rice

d) Bajra

6. What is the shape of a birthday cap?

a) cylinder

b) cuboid

c) rectangle

d) cone

7. A log of wood has \_\_\_\_\_ faces.

- a) 7                      b) 2                      c) 4                      d) 3

8) James spent 28 rupees to buy his books and 55 rupees for his sister's books. How much money did he spend in all?

- a) 63                      b) 73                      c) 33                      d) 83

9) Volume of a liquid in a pot is 3 ml. What will be the volume of the liquid in 14 same type of pot?

- a) 52 ml                      b) 42 ml                      c) 100 ml                      d) none of these

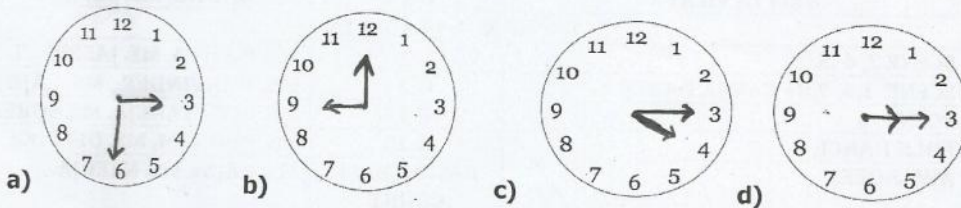
10) Abhay's weight is 54 kg 87 grams and Uday's weight is 45 kg 78 grams. Who is the heavier of the two?

- a) Abhay                      b) Uday                      c) both have equal weight                      d) none of them

11) Total number of days in January month + Total number of days in December month is equal to:

- a) 60 days                      b) 31 days                      c) 62 days                      d) 58 days

12. Which one of the following watches shows the time 4:15?

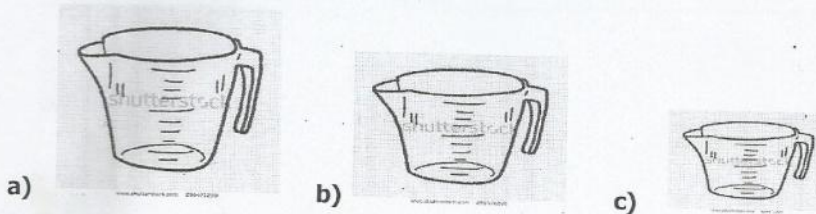


13. The cost of an icecream is given with the figure. Jenny gave shopkeeper a note of ₹50. How much money did she get back?



- a) 25                      b) 27                      c) 29                      d) 30


14. Which one is of the following have more capacity?



15. if today is August 31 , what is the date day after tomorrow?

- a) September 1    b) August 31    c) July 1    d) September 2

16. How many triangles are there in the following figures?



- a) 8    b) 6    c) 5    d) 11

17. The circle is third ,the rectangle is after the circle ,the triangle is before the square, the square is second. Which one of the following is correct?

- a)
- b)
- c)

d) none of these

18. John is feeling hungry .He goes to a shop and see the prices of different food articles .The cost of Pastry is ₹45 and cold drinks is ₹15 . He purchases both the items. How much money he pays to the shopkeeper?

- a) ₹50    b) ₹60
- c) ₹26    d) ₹40

19. Add the following 10 l, 800 ml, 200 ml?

- a) 11000 ml    b) 900ml    c) 800 ml    d) none of these

20. Add the following money:

=

- a) ₹ 540    b) ₹760    c) ₹650    d) ₹ 500

MATHS OLYMPIAD (CLASS- II)

WORKSHEET- 1

1. Unit to measured the height of a tree is \_\_\_\_\_




- a)ml      b)m      c)g      d)l

2.The number of triangle in the given figure is \_\_\_\_\_



- a)6      b)5      c)4      d)7

3.Which one of the following is not a square?

- a)       b)       c)       d)None of these

4.The number of days from Tuesday to Thursday is \_\_\_\_\_.

- a) 5      b) 2      c) 3      d) 1

5. It is December now. Last month was \_\_\_\_\_

- a) July      b) November      c) September      D) June

6. It is 7:30 now. Half an hour ago it was \_\_\_\_\_.

- a)5:00      b)10:00      c)1:00      d) 8:00

7. Sunaina went to the market with 75. She spent 40 on popcorn .How much money is she left with?

- a) 60      b)45      c)33      d)70

8. Each side of the given figure is 4 cm long. What is the length of rope needed to form this figure?



- a) 30      b)28      c)24      d) none of these

9. Hour hand of the clock is at 2 and minute hand is at 3 .The time shown by the clock is :

- a) Quarter past 1      b)Quarter pat 2      c)Half past 2      d)none of these

10. Fill in the blanks from the options given below:

March \_\_\_\_\_ May \_\_\_\_\_ July \_\_\_\_\_

- a) April, June, August      b) April, September, August      c) August, June, April  
d) February, April, July

11. Riya watched her favourite television programme " Tom and Jerry" from 5:00 to 6:30 . How long did the programme last?

- a) 1:30 hours    b) 2:30 hours    c) 2:00 hours    d) 5:00

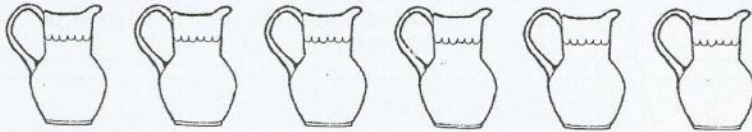
12. What is the time if it is 20 minutes after 11:00 ?

- a) 11:40    b) 11:45    c) 11:10    d) 11:20

13. Add: 230 litres 30 ml and 200 litres 40 ml

- a) 330 litres 60 ml    b) 230 litres 80ml    c) 430 litres 80 ml    d) none of these

15. If one of the following containers can hold 3 litres of milk and each container has equal capacity then how much milk these containers can hold in all?



- a) 10 litres    b) 15 litres    c) 20 litres    d) 18 litres

16. A rope is 340 m 56 cm . We cut a piece 178 m 29 cm from it. What is the remaining length of the rope.

- a) 162 m 27 cm    b) 210 m 22 cm    c) 112 m 34 cm    d) none of the above

17. Quarter is \_\_\_\_\_

- a)  $\frac{3}{4}$     b)  $\frac{2}{6}$     c)  $\frac{1}{6}$     d)  $\frac{1}{4}$

18) Which of the shapes below is shaded to represent  $\frac{2}{4}$ ?



19. Five and a half kilogram is same as \_\_\_\_\_

- a) 5 kg 500 g    b) 5 kg 50 g    c) 3 kg 500 g    d) 50 kg 500g

20. Distance between Rahil and Shubham is 80 m and the distance between Shubham and Kabir is 72 m. What is the distance between Rahil and Kabir?

- a) 80 m    b) 72m    c) 152m    d) 78m

